




CUENTA Y ESCRIBE LOS NÚMEROS QUE FALTAN



$$\square + \square = \square$$



$$\square + \square = \square$$



$$\square + \square = \square$$



$$\square + \square = \square$$



$$\square + \square = \square$$