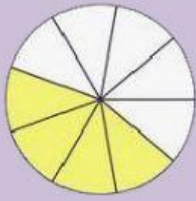


Frações

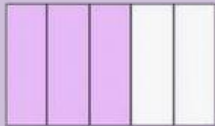
faça como no exemplo



3

5

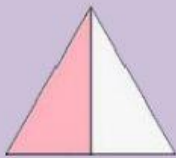
Dois
terços



4

12

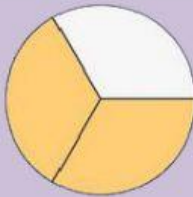
Um
meio



2

3

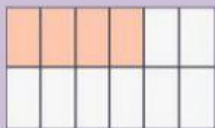
Três
quintos



4

9

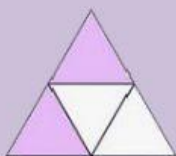
Quatro
doze avos



1

2

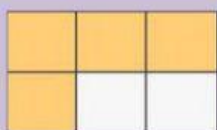
Quatro
sextos



2

4

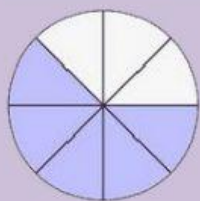
Quatro
nonos



4


6

Dois
Quartos



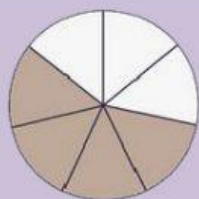
$$\frac{5}{10}$$

Cinco
Oitavos



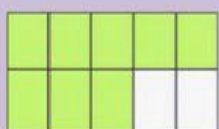
$$\frac{1}{3}$$

Quatro
sétimos



$$\frac{3}{9}$$

Um
terço



$$\frac{5}{8}$$

Oito
décimos




$$\frac{4}{7}$$

Três
nonos



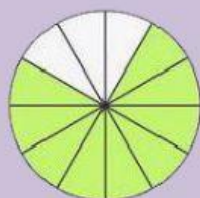
$$\frac{9}{12}$$

Seis
décimos



$$\frac{10}{14}$$

Dez quatorze
avos



$$\frac{6}{10}$$

Nove
doze avos