


Weekly Test – Mathematics

Listen to each problem carefully, then solve:

1. Fill in the missing numbers.

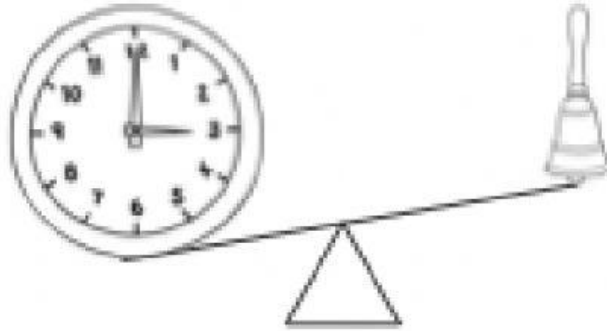


2. Complete the sentences using one of the words:

heavier

lighter

balanced




The clock is _____ than the bell.

The bell is _____ than the clock.

3. Put the numbers below in ascending order.

14, 5, 20, 3



4. Compare the numbers below. Write greater than $>$ or less than $<$ to complete the statement.

$$7 \quad \boxed{} \quad 15$$

5. $13 + 5 = \underline{\hspace{2cm}}$

6. $2 + 4 + 8 = \underline{\hspace{2cm}}$

7. $12 - 5 = \underline{\hspace{2cm}}$

8. There are 8 elephants in a zoo.

6 more are brought to the zoo.

How many elephants are there in total?



+



=




+

=

There are _____ elephants in total.


9. I caught 5 butterflies on Monday, 4 butterflies on Tuesday and 10 butterflies on Wednesday. How many butterflies did I catch in all?



$$\underline{\hspace{2cm}} + \underline{\hspace{2cm}} + \underline{\hspace{2cm}} = \underline{\hspace{2cm}}$$

There are _____ butterflies in all.

10. Emma has 9 cookies. She eats 3 cookies. How many cookies does she have left?



$$\underline{\hspace{2cm}} - \underline{\hspace{2cm}} = \underline{\hspace{2cm}}$$

Emma has _____ cookies left.

