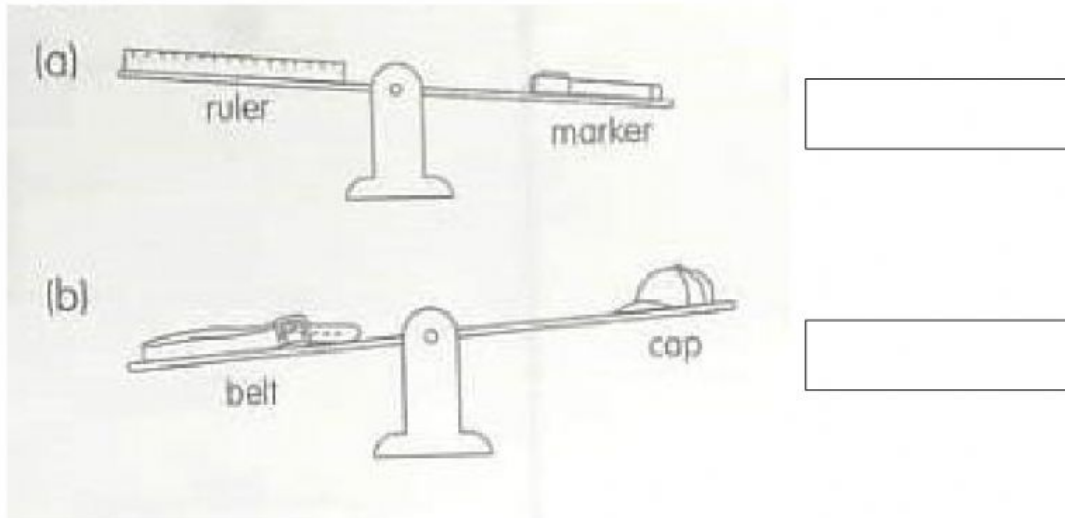


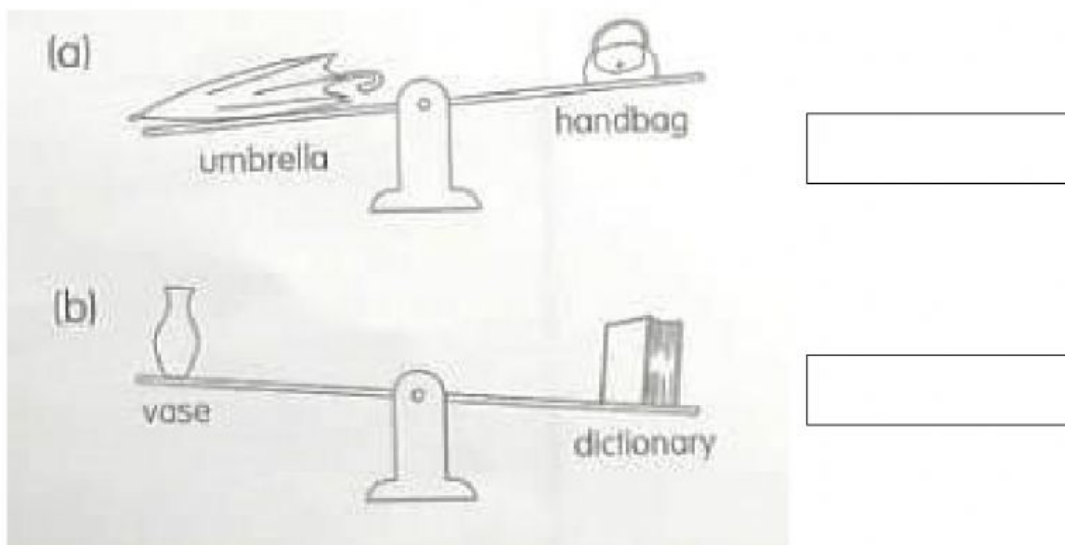
# MASS

## Worksheets 1. Comparing Mass

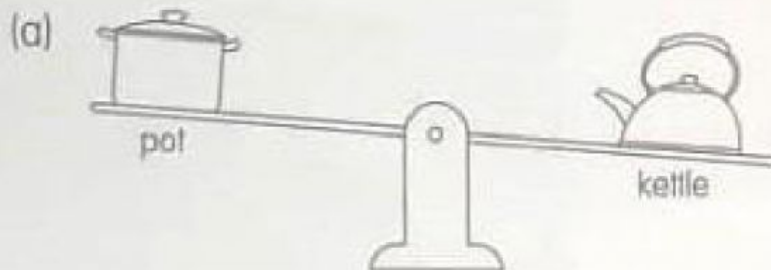
1. ¿Which is the heavier object?



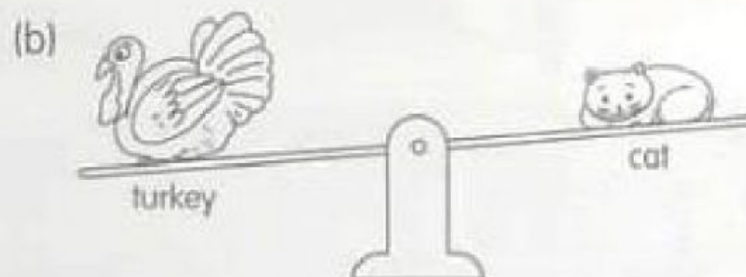
2. ¿Which is the lighter object?



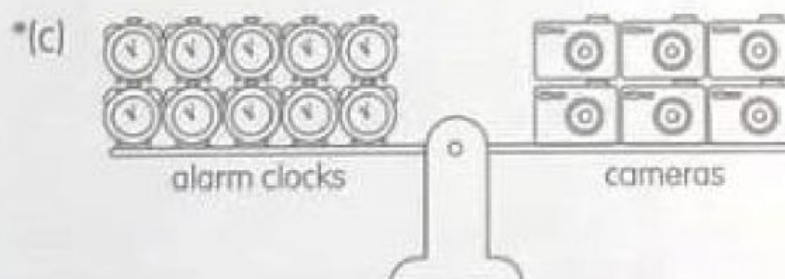
3. Fill in the blanks with **Heavier than**, **as heavy as** or **Lighter than**.



The kettle is  the pot.



The cat is  the turkey.



Ten alarm clocks are  six cameras.

So, one alarm clock is  one camera.

4. Compare the three objects in each set. Identify the **lightest** and **heaviest** object. Then draw a line from the object to the correct word.



• lightest

• heaviest

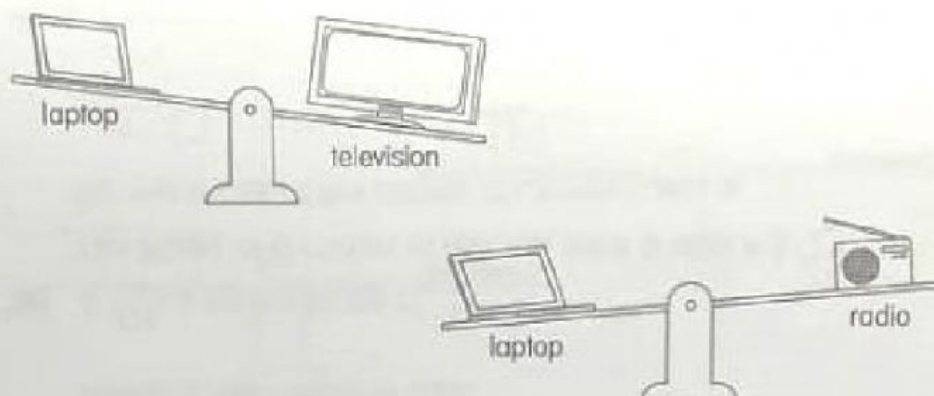
• lightest

• heaviest

• lightest

• heaviest

5. Look at the pictures. Write **True** or **False** for each of the following sentences.



- (a) The television is the heaviest.
- (b) The radio is as light as the laptop.
- (c) The television is as heavy as the radio.
- (d) The laptop is heavier than the television.
- (e) The radio is lighter than the television.
- (f) The laptop is the heaviest.
- (g) The objects arranged from the lightest to the heaviest are radio, laptop and television.