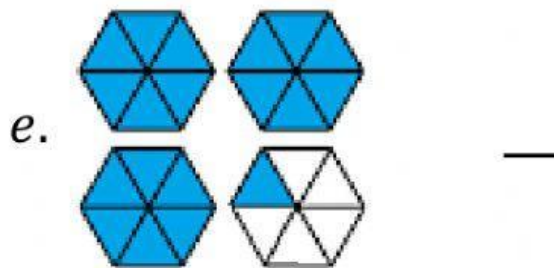

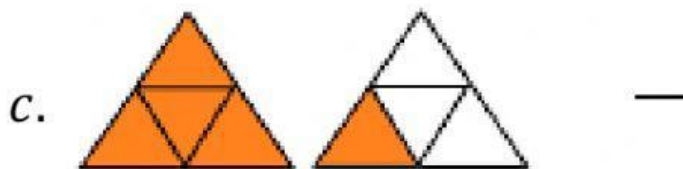


ESCRIBE LAS SIGUIENTES FRACCIONES COMO NÚMERO MIXTO



f. $\frac{15}{4} =$ —

g. $\frac{19}{3} =$ —

h. $\frac{9}{7} =$ —