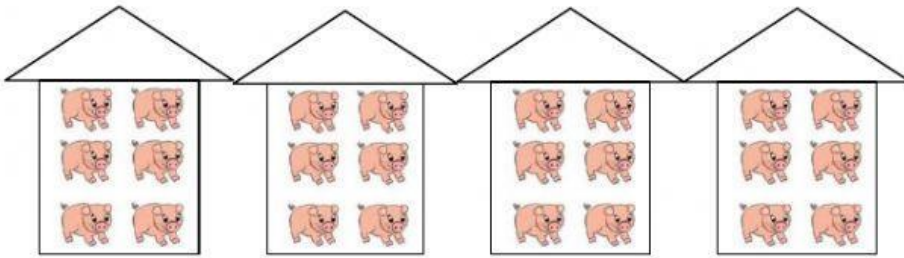


# Matemática

★ Une con flechas los siguientes dibujos con su cálculo.  
¡Cuidado que hay trampitas!



$3 + 3 + 3 =$

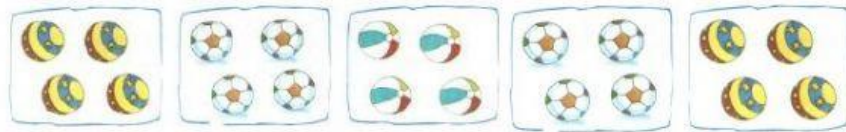
$6 + 6 =$



$6 \times 2 =$




$6 + 6 + 6 + 6 =$




$2 \times 5 =$

$2 + 2 + 2 + 2 + 2 =$



$3 \times 3 =$

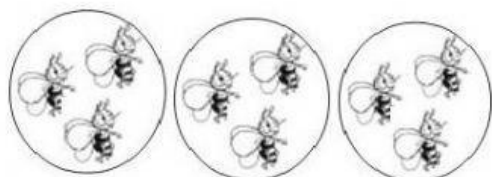


$5 + 5 + 5 =$



$8 + 8 =$

$4 + 4 + 4 + 4 + 4 =$



$3 \times 2 =$



$5 + 5 + 5 + 5 + 5 + 5 =$