






	<p>Which way does the box move?</p> <p>Left / Right</p>		<p>The force to the right is ____N The force to the left is ____N</p> <p>The resultant force is ____N to the left / right</p>
	<p>The box is:</p> <p>Moving left / moving right / standing still</p>		<p>The resultant force is ____N</p> <p>This means the box is accelerating / decelerating / moving at a constant speed</p>
	<p>The box is moving</p> <p>Left / right</p> <p>The resultant force is 5N to the left / right</p>		<p>The resultant force is ____N. This means the box is moving to the right / left / standing still</p>
	<p>The force to the left is ____N</p> <p>The force to the right is ____N</p> <p>The resultant force is 10N to the left / right</p>		<p>Create your own example</p>