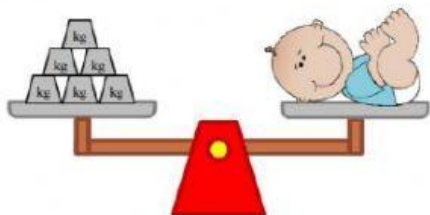
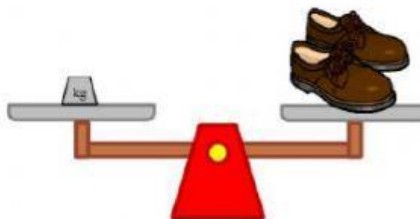


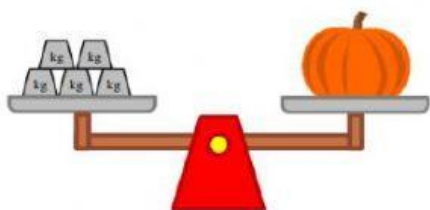
Find the mass of each object.



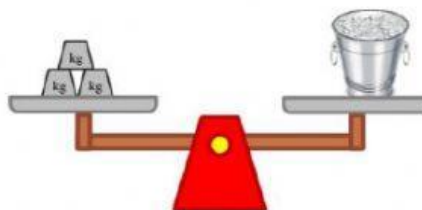
The baby weighs ____ kg.



The pair of shoes weighs ____ kg.



The pumpkin weighs ____ kg.



The ice bucket weighs ____ kg.

Find the volume of liquid in each cylinder.

