



<i>Academic Year</i>	<i>Subject</i>	<i>Name</i>	<i>Section</i>	<i>Date</i>
2020–2021 1 st Term	Math		Y5- _____	

Test Review

Fractions and Decimals

Q1 Find the key that unlocks each lock! Connect each fraction in the lock with an equivalent decimal in the key.


$$\frac{2}{10}$$


$$\frac{4}{10}$$


$$\frac{14}{100}$$


$$\frac{2}{100}$$


$$\frac{12}{100}$$


$$\frac{4}{100}$$


$$0.02$$


$$0.14$$


$$0.2$$


$$0.4$$


$$0.04$$


$$0.12$$

Q2 Compare the decimal numbers by using the symbols in the box.

$<$	$=$	$>$
-----	-----	-----

a) 2.15

2.05

c) 54.2

54.20

b) 96.17

96.7

Q3 drag and drop to set these prices in order of size, starting with the smallest.

a)



--	--	--	--

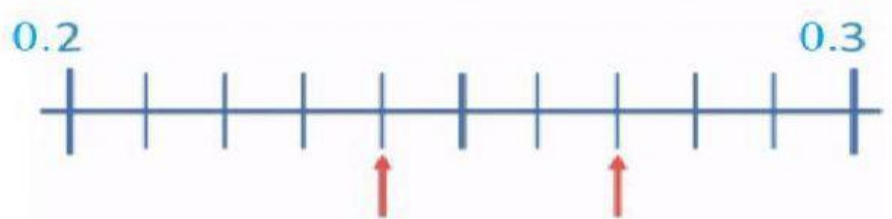
b)



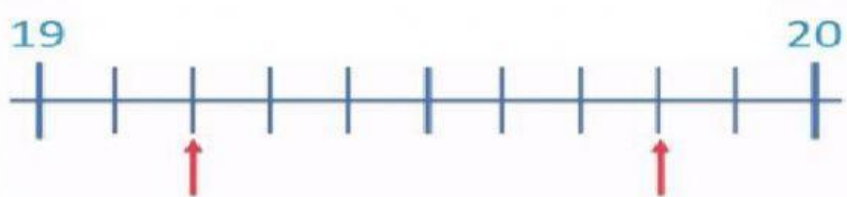
--	--	--	--

Q4 Look at the number lines which number goes in each box?

a)



b)



Q5 Write down the decimal equivalent for each fraction.

a) $5\frac{7}{10} =$

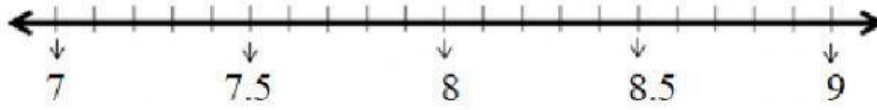
c) $7\frac{9}{10} =$

b) $\frac{5}{10} =$

d) $\frac{6}{100} =$

Q6 Which number is halfway between:

(Use the number line to help you.)



a) 7.6 and 8.2

--

b) 8.4 and 8.8

--


Q7 Write the missing numbers in the boxes to complete the sequence.

a) 0.66; 0.65; 0.64;

b) 3.5; 3.6; 3.7;

c) 3.02; 3.03; 3.04;

Q8 write the fraction and decimal shown by the shaded part.



Fraction=

10

Decimals=

