

Name : .....  
Grade 4 / .....

## Multiplication as Comparison

Use multiplication or division to complete each equation and/or drawing.

2. 3 times as many



$$\underline{\quad} \times \underline{\quad} = 3$$

3. 5 times more



$$\underline{\quad} \times \underline{\quad} = 25$$

4. 4 times as much



$$\underline{\quad} \times 3 = 12$$

5. 10 times as much



$$10 \times \underline{\quad} = 40$$

6. 2 times more



$$2 \times \underline{\quad} = 6$$

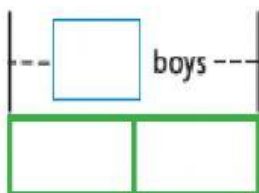
7. twice as many



$$2 \times \underline{\quad} = 14$$

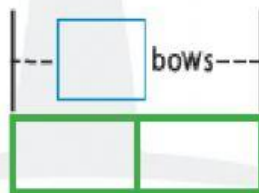
Complete each bar diagram. Then complete the multiplication equation.

8. twice as many  
as 4 boys



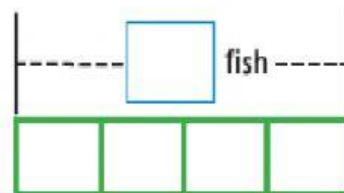
$$2 \times \underline{\quad} = 8$$

9. 2 times as many  
as 3 bows



$$\underline{\quad} \times \underline{\quad} = \underline{\quad}$$

10. 4 times as many  
as 6 fish



$$\underline{\quad} \times \underline{\quad} = \underline{\quad}$$