






























Vertical Addition











Count the images in each box. Print the answer under the line.




			3
+			
			+ 6
			<hr/>

	1
+	
	+ 4
	<hr/>
	
	

				7
+				
				+ 3
				<hr/>

	1
+	
	+ 9
	<hr/>
	
	
	
	

			3
+			
			+ 4
			<hr/>
			

	1
+	
	+ 8
	<hr/>
