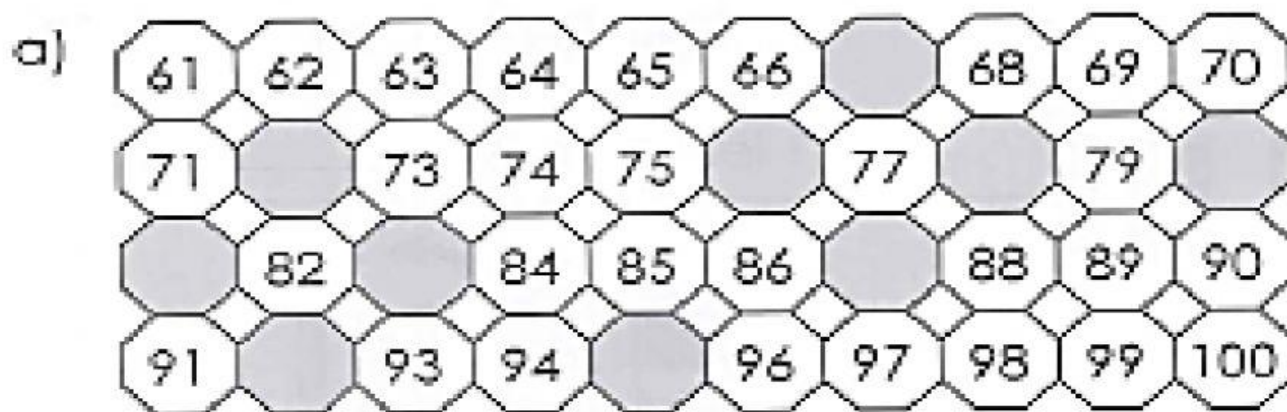


MATHEMATICS

Complete the chart below.
Then, fill in the missing numbers.



- b) 1 more than 77 is _____.
- c) 10 more than 77 is _____.
- d) 1 less than 82 is _____.
- e) 10 less than 82 is _____.
- f) 1 more than 80 is _____.
- g) 2 less than 80 is _____.
- h) 3 less than 84 is _____.
- i) 10 less than 86 is _____.
- j) 20 less than 98 is _____.
- k) 30 more than 62 is _____.
- l) 20 less than 96 is _____.
- m) 5 more than 75 is _____.
- n) 5 less than 100 is _____.

MATHEMATICS

Select the greater number.

a) 67, 48

b) 50, 63

Select the smaller number.

a) 75, 55

b) 82, 84

Arrange the numbers in order.
Begin with the greater number..

40

36

47

_____ , _____ , _____
(greatest)

Arrange the numbers in order.
Begin with the smallest number..

91




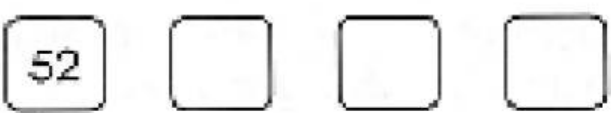
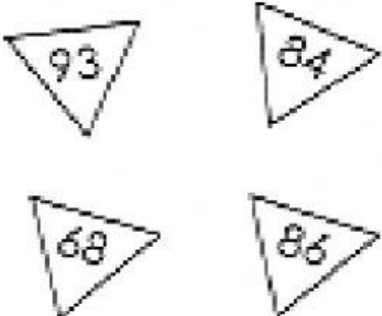
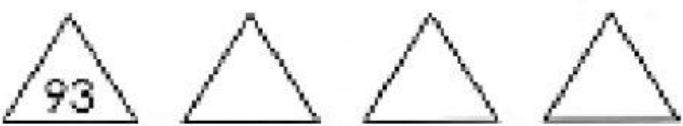
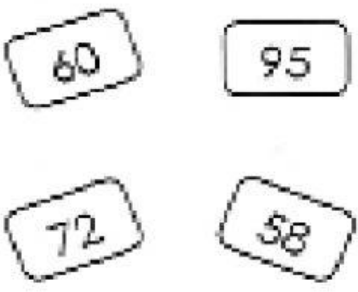

95

89

_____ , _____ , _____
(smallest)

MATHEMATICS

Arrange the numbers in order.
Begin with the given number.

a)		 <p>The smallest number is _____.</p> <p>The greatest number is _____.</p>
b)		 <p>The smallest number is _____.</p> <p>The greatest number is _____.</p>
c)		 <p>The smallest number is _____.</p> <p>The greatest number is _____.</p>
d)		 <p>The smallest number is _____.</p> <p>The greatest number is _____.</p>