



Arrays - Multiplication

TASK 1

Complete the multiplication sentence for the given arrays.



$$4 \times \square = 8$$




$$\square \times 3 = 9$$




$$\square \times 5 = 15$$



$$2 \times \square = 10$$




$$4 \times \square = 16$$



$$\square \times 3 = 12$$

TASK 2

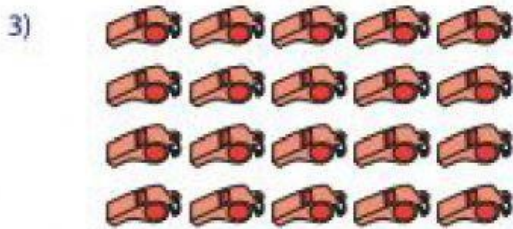
Write the multiplication sentence for each array given below.




$$\underline{\quad} \times \underline{\quad} = \underline{\quad}$$



$$\underline{\quad} \times \underline{\quad} = \underline{\quad}$$




$$\underline{\quad} \times \underline{\quad} = \underline{\quad}$$



$$\underline{\quad} \times \underline{\quad} = \underline{\quad}$$



$$\underline{\quad} \times \underline{\quad} = \underline{\quad}$$



$$\underline{\quad} \times \underline{\quad} = \underline{\quad}$$



$$\underline{\quad} \times \underline{\quad} = \underline{\quad}$$



$$\underline{\quad} \times \underline{\quad} = \underline{\quad}$$

TASK 3 (Optional)

Draw Arrays for the following multiplication sentences in the notebook.

1. $3 \times 6 =$

2. $4 \times 7 =$