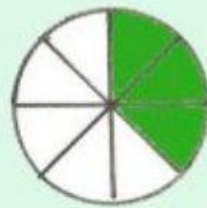
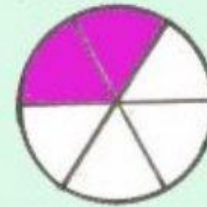
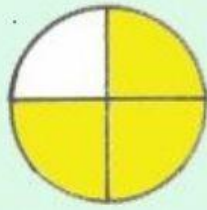


¿TE ANIMÁS?

ARRASTRO LA FRACCIÓN QUE CORRESPONDA:



$$\frac{1}{3}$$

$$\frac{3}{8}$$

$$\frac{3}{4}$$

$$\frac{2}{6}$$