

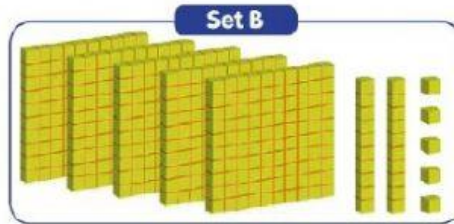
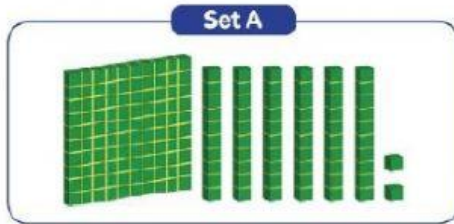
1. $8 + 6 =$

a. 15

b. 14

c. 13

2.




The addition of set A and set B is...

a. 587

b. 686

c. 687

3.



$$\boxed{} - \boxed{} = \boxed{}$$

4. Robby has 215 cookies. His sister gives 110 cookies to him. How many cookies does he have altogether ?
