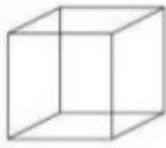
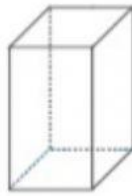
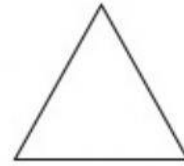



Escribe el nombre de las figuras y cuerpos geométricos (1 punto c/u).

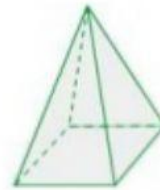




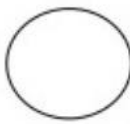


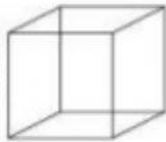






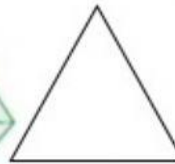
Escribe su nombre

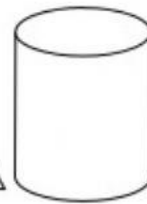




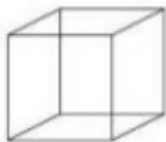




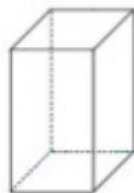




Completa los recuadros identificando el número de caras, vértices y aristas de cada cuerpo geométrico. 1 pto c/u



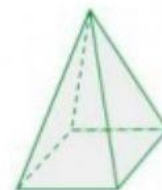
Caras:
Vértices:
Aristas:



Caras:
Vértices:
Aristas:



Caras:
Vértices:
Aristas:



Caras:
Vértices:
Aristas: