










Name _____

Section _____

LS 3 Science – Term 1
MT 2: Cycles of Matter

Directions: Click each picture and drag them in the correct column below.

SOLIDS	LIQUIDS	GASES

 ice cube	 candy	 orange (fruit)
 orange juice	 carbon dioxide	 pancake syrup
 propane (inside the tank)	 steam	 water