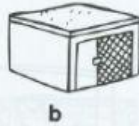


Which picture completes the second pair in the same way as the first pair?
Circle the letter.

Example



3



is to



as



is to

?



a



b



c



d


4



is to



as



is to

?



a



b



c



d

5



is to



as



is to

?



a



b



c



d

6



is to



as



is to

?



a



b



c



d

7



is to



as



is to

?



a



b



c



d

8



is to



as



is to

?



a



b



c



d

Which is the odd one out? Circle the letter.

Example



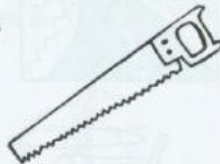
a



b




c



d

9




a



b



c



d

10



a



b



c



d