



PAKISTAN INTERNATIONAL SCHOOL JEDDAH – (English Section)
First Term 2020– 2021

Subject	Unit	Lessons	Type of Sheet
Mathematics	1	6 – 7 - 8	Reinforcement sheet
Name:		Y 2-	Date:

Q1. Do these numbers round up or down? Write the nearest 10.

a. 11 rounds to

b. 46 rounds to



Q2. Fill in the missing ordinal numbers to show the position of the birds.



	2nd				6th	
--	-----	--	--	--	-----	--





Q3. Count the flowers and write the number. Tick the even numbers and cross the odd numbers.



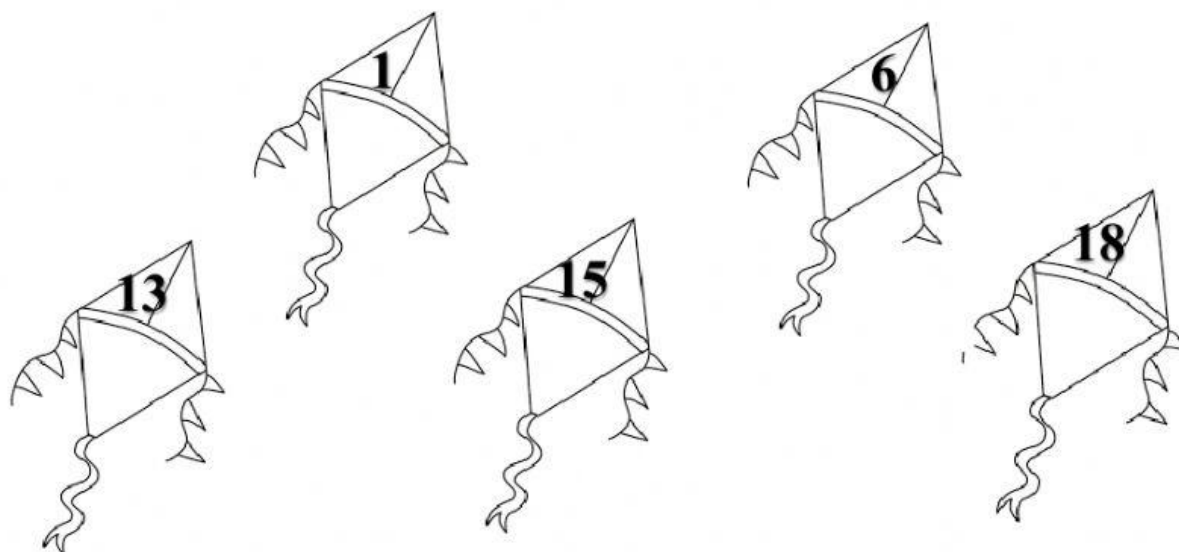




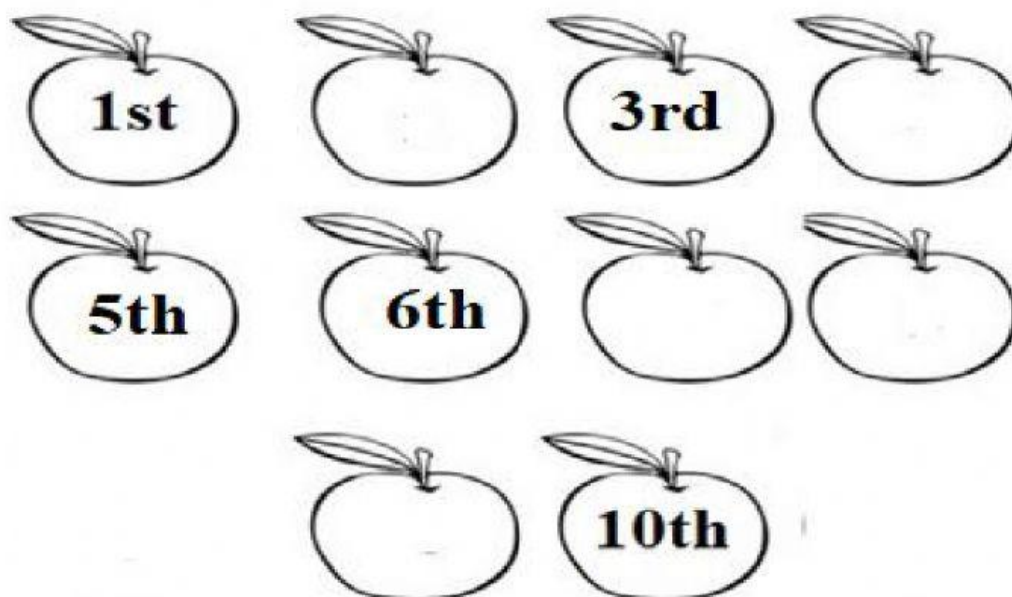




Q4. Select if the number on the kite is even or odd.



Q2. Fill in the missing ordinal numbers to show the positions.



- a. Cross out the 8th and 9th apple.
- b. Tick the 4th apple.

Even and Odd Numbers	
Even Numbers end in	Odd Numbers end in
<div>0</div> <div>2</div> <div>4</div> <div>6</div> <div>8</div>	<div>1</div> <div>3</div> <div>5</div> <div>7</div> <div>9</div>
Examples: 4, 56, 730	Examples: 9, 83, 641