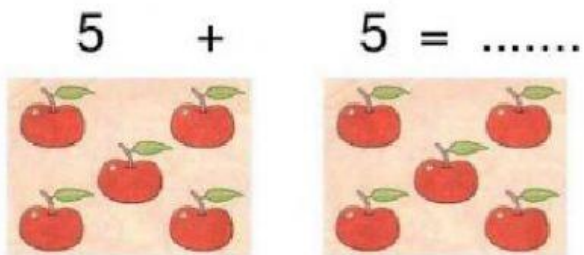


# LA MULTIPLICACIÓN

➤ Recordamos con estos ejemplos la multiplicación.

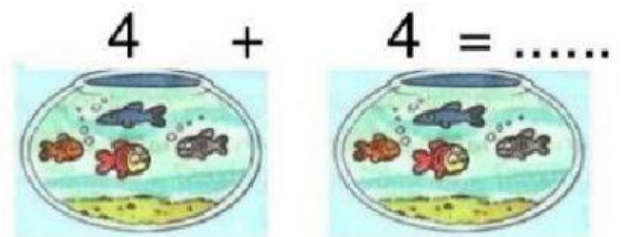


2 grupos de 5 = 10

2 veces 5 = 10

$5 + 5 = 10$

$2 \times 5$



2 grupos de 4 = 8

2 veces 4 = 8


$4 + 4 = 8$

$2 \times 4 = 8$

➤ Ahora te toca practicar a ti.




$$\boxed{3} + \boxed{\phantom{0}} = \boxed{\phantom{0}}$$
$$\boxed{\phantom{0}} \times \boxed{\phantom{0}} = \boxed{\phantom{0}}$$




$$\boxed{\phantom{0}} + \boxed{\phantom{0}} + \boxed{\phantom{0}} + \boxed{\phantom{0}} + \boxed{\phantom{0}} + \boxed{\phantom{0}} = \boxed{\phantom{0}}$$
$$\boxed{\phantom{0}} \times \boxed{\phantom{0}} = \boxed{\phantom{0}}$$

➤ -¡RESOLVEMOS!

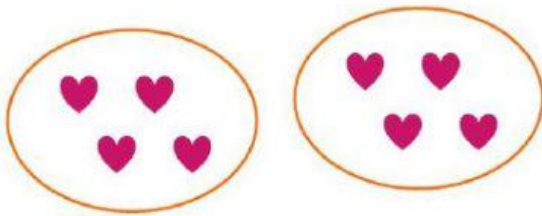


$$3 \times 2 = \dots\dots\dots$$

o)



$$2 \times 5 = \dots\dots$$



$$2 \times 4 = \dots\dots\dots$$



$$2 \times 6 = \dots\dots\dots$$