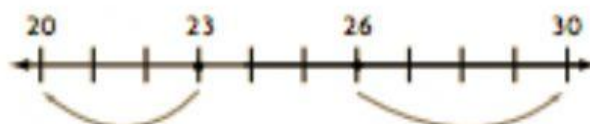



Round to Nearest 10 and 100

Rounding to the Nearest 10

How do you round numbers like 23 and 26 to the nearest ten?

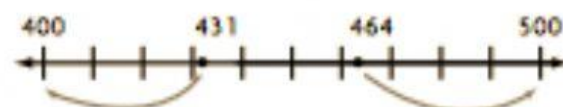
- See what two tens a number is between. Both 23 and 26 are between 20 and 30.
- See which ten a number is closer to. If the ones digit is less than 5, round to the lesser ten. If the ones digit is 5 or greater, round to the greater ten.



Rounding to the Nearest 100

How do you round numbers like 431 and 464 to the nearest hundred?

- See what two hundreds a number is between. Both 431 and 464 are between 400 and 500.
- See which hundred a number is closer to. If the tens digit is less than 5, round to the lesser hundred. If it is 5 or greater, round to the greater hundred.



Round to the nearest ten.

1. 46

2. 52

3. 35

4. 27

Round to the nearest hundred.

5. 134

6. 782

7. 893

8. 615

9. 125

10. 675

11. 832

12. 550
