



Which is the strongest of them all?






Sara had a set of magnets. She wanted to test which one of them is the strongest.

She opened a box of paperclips. She put each magnet close to the box.

Next, she counted the number of paperclips that got stuck to the magnet when she moved the magnet away from the box.

Can you help her identify the strongest magnet?

(Hint: The magnet holding the highest number of paperclips will be the strongest.)

Magnet	A	B	C	D	E
					
Number of paperclips					

Question: Which is the strongest magnet?

Answer: Magnet ____ is the strongest.