



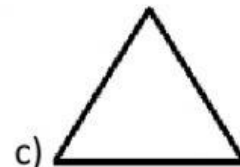
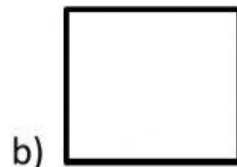
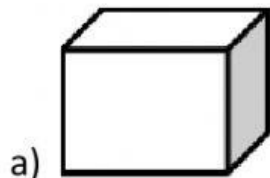
ECOLE PREPARATOIRE STRAUSS

Classe de Réception
Composition du 3^{me} Trimestre
Epreuve de Mathématiques

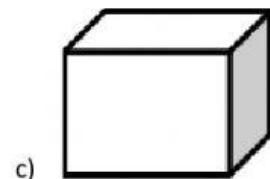
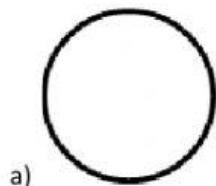
Questions aux choix multiples.

Choisissez les noms correspondants aux formes.

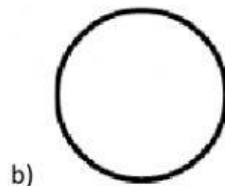
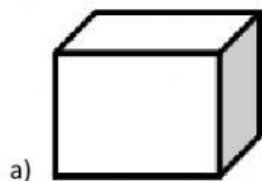
1. Un triangle



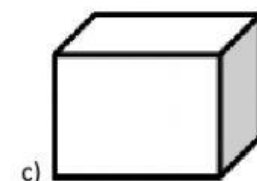
2. Un rectangle



3. Un cube



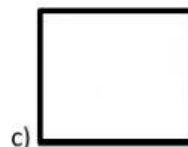
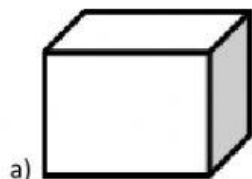
4. Un carre








ECOLE PREPARATOIRE STRAUSS


5. Un cercle




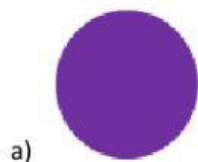
6. Rouge





7. Jaune






8. Bleu



9. Verte



10. Noir





ECOLE PREPARATOIRE STRAUSS

11.




- a. Sphere
- b. Cone
- c. Cube

12. .



- a. Sphere
- b. Cube
- c. Carre

13.



- a. Cylindre
- b. Cone
- c. Triangle

14.



- a. Cylindre
- b. Cube
- c. Cercle



ECOLE PREPARATOIRE STRAUSS

II- Indiquez les positions appropriées.

15. Les livres sont **sur** la table.



b)

16. Le livre est **sous** la table.



17. Les oiseaux sont **sur** un arbre.



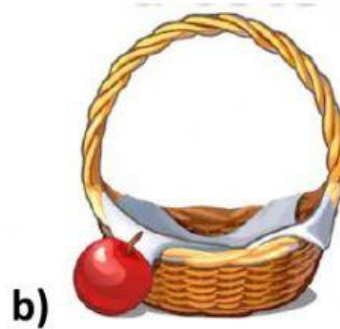
18. Le chien est **sous** un arbre.



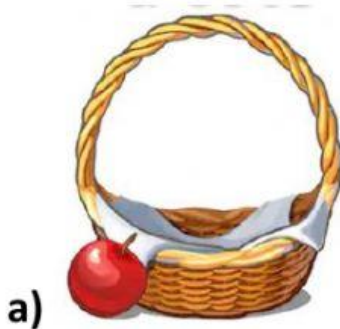
ECOLE PREPARATOIRE STRAUSS



19. Les pommes sont **dans** le panier.



20. La pomme est **a côté** du panier.



21. Les livres sont **dans** le sac.





ECOLE PREPARATOIRE STRAUSS

III. Choisissez les options correspondantes aux fractions données.

22. Un biscuit entier

a)



b)



23. Une moitié de pomme

a)



b)



24. Un gâteau entier

a)



b)





ECOLE PREPARATOIRE STRAUSS

25. Une moitié de carotte.

a)



b)



26. Une moitié d'orange.

a)



b)



IV. Choisissez les options correspondantes aux longueurs données.

27. Cet arbre est plus long.

a)



b)



28. Simon Serpent est long.

a)



b)






ECOLE PREPARATOIRE STRAUSS

29. Bébé Chenille est long.

a)



b)



30. Cette voiture est plus longue.

a)



b)

