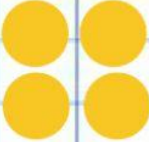









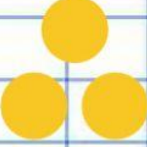

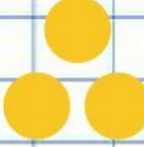









SUMA Y RESTA

Resuelve las restas:

Selecciona las sumas o restas que den 6

$8 + 2$	$5 - 1$	$3 + 3$
$10 - 4$	$7 - 1$	$5 + 1$
$7 + 7$	$8 - 2$	$4 - 3$

Completa:

$$6 - 6 = \square$$

$$5 + \square = 5$$

$$10 - 10 =$$

$$4 + \square = 4$$

Escribe la frase numérica:



Marca si la suma o resta
está correcta o incorrecta

$$7 + 3 = 10$$



$$10 - 2 = 12$$



$$9 + 2 = 7$$



$$6 - 4 = 2$$



Escribe la frase numérica:

