





# Quadrilateral Shapes: Fill-In the Blank Worksheet

**Directions:** Fill in the missing vocabulary from the Vocabulary Bank to complete each sentence.

Fill-in the blank	
<b>Shape 1</b>	<b>Shape 2</b>
This shape is a _____ because all sides are _____.	This shape is a _____ because it has 2 _____ sides and 2 _____ sides.
	
<b>Shape 3</b>	<b>Shape 4</b>
This shape is a _____ because 2 sides are _____ and 2 sides are _____.	This shape is a _____ because sides are _____ to each other.
	

## Vocabulary Bank:

Trapezoid   Straight   Slanted   Parallelogram   parallel  
Rectangle   Short   Long   Square   Equal