


Area of a Rectangle

T1L1S3

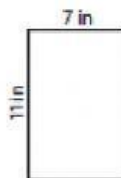
Find the area of each rectangle.

1)



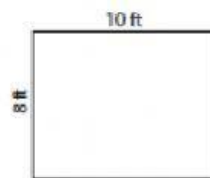
Area =

2)




Area =

3)



Area =

4)



Area =

5)



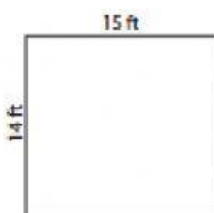
Area =

6)



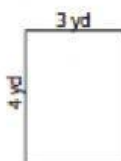
Area =

7)



Area =

8)



Area =

9)



Area =