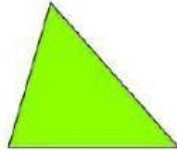





## HOJA DE TRABAJO QUINTO PRIMARIA

SERIE I: selecciona correctamente a cada polígono según su clasificación.

**TRIÁNGULO**




CÓNCAVO  
 CONVEXO



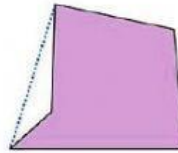
**DECÁGONO**

CÓNCAVO  
 CONVEXO



**CUADRILÁTERO**

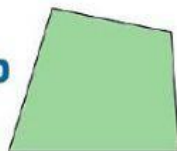
CÓNCAVO  
 CONVEXO



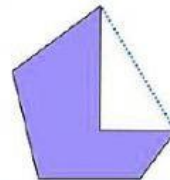
**PENTÁGONO**

CÓNCAVO  
 CONVEXO

**CUADRILÁTERO**



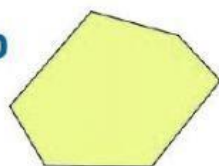
CÓNCAVO  
 CONVEXO



**HEXÁGONO**

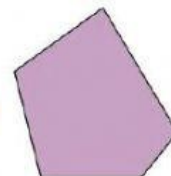
CÓNCAVO  
 CONVEXO

**HEXÁGONO**

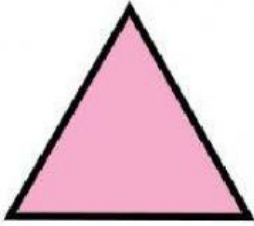


CÓNCAVO  
 CONVEXO


**PENTÁGONO**




CÓNCAVO  
 CONVEXO




\_\_\_ REGULAR  
\_\_\_ IRREGULAR



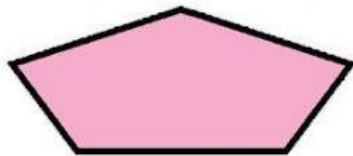
\_\_\_ REGULAR  
\_\_\_ IRREGULAR



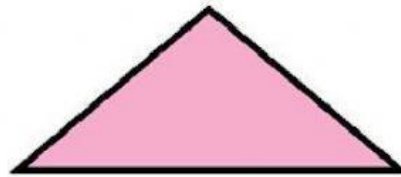
\_\_\_ REGULAR  
\_\_\_ IRREGULAR



\_\_\_ REGULAR  
\_\_\_ IRREGULAR




\_\_\_ REGULAR  
\_\_\_ IRREGULAR



\_\_\_ REGULAR  
\_\_\_ IRREGULAR



\_\_\_ REGULAR  
\_\_\_ IRREGULAR



\_\_\_ REGULAR  
\_\_\_ IRREGULAR