

LEARN TO COUNT



1

one



NUMBER 1

Q1. Circle the number 1.

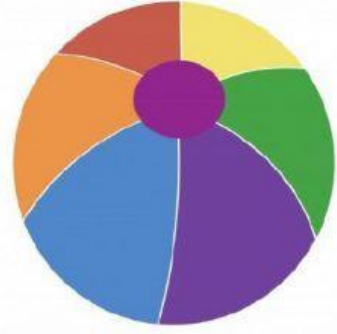
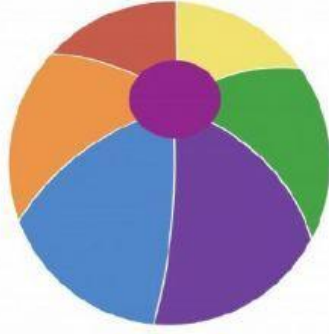
1	6	3	1	1
7	2	1	4	10
1	8	5	9	1

Q2. Count the butterflies. How many butterflies are there? -----



2

two




NUMBER 2

Q1. Circle the number 2.


2	6	3	2	2
7	2	2	4	10
2	8	5	9	2

Q2. Count the apples. How many apples are there? -----



3

three




NUMBER 3

Q1. Circle the number 3.

3	8	3	4	2
1	7	6	3	10
3	8	3	9	5

Q2. Count the ants. How many ants are there? -----



4

four



NUMBER 4

Q1. Circle the number 4

4	8	4	4	2
1	7	6	4	10
3	8	4	9	5

Q2. Count the flowers. How many flowers are there? -----

