

Counting Squares

L251


Find the area of each shape by counting the squares.

1) Scale: = 4 ft²




Area = _____

2) Scale: = 5 in²



Area = _____

3) Scale: = 4 yd²



Area = _____

4) Scale: = 5 in²



Area = _____

5) Scale: = 3 yd²




Area = _____

6) Scale: = 2 ft²




Area = _____

7) Scale: = 4 ft²



Area = _____

8) Scale: = 2 in²




Area = _____

9) Scale: = 5 yd²



Area = _____

10) Scale: = 2 in²



Area = _____

11) Scale: = 3 yd²



Area = _____

12) Scale: = 2 ft²



Area = _____