

# Counting Squares

L1S2

 = 1 ft<sup>2</sup>


Find the area of each shape by counting the squares.

1)



Area = \_\_\_\_\_

2)



Area = \_\_\_\_\_

3)



Area = \_\_\_\_\_

4)



Area = \_\_\_\_\_

5)



Area = \_\_\_\_\_

6)




Area = \_\_\_\_\_

7)




Area = \_\_\_\_\_

8)




Area = \_\_\_\_\_

9)



Area = \_\_\_\_\_

10)



Area = \_\_\_\_\_

11)



Area = \_\_\_\_\_

12)



Area = \_\_\_\_\_