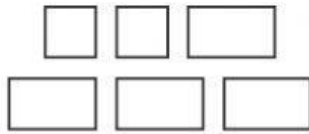


What is the shape of the faces of this object?



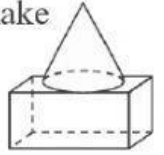
- A.
- B.
- C.

What object has the faces shown?



- F.
- G.
- H.

Which three-dimensional shape is not used to make the composite shape shown?



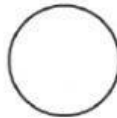
- F.
- G.
- H.

What is the shape of the faces of this object?



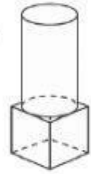
- A.
- B.
- C.

What object has the face shown?



- F.
- G.
- H.

Which shape is used to make this composite shape?




- A.
- B.
- C.

Which shape has 1 face and 1 vertex?

- A.
- B.
- C.
- D.

Which object has the faces shown?



- F.
- G.
- H.
- I.

Circle the names of the shapes used to make this composite shape.



- cone
- cylinder
- cube

Circle the shapes used to make the composite shape.

