



Count to find the total number of squares. Write how many squares make each rectangle.

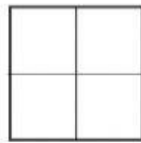


\_\_\_\_\_ squares



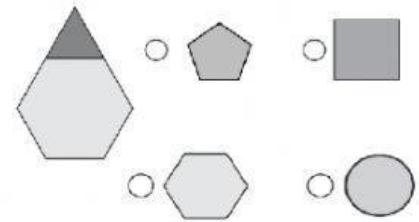
\_\_\_\_\_ squares

How many equal parts make up the whole?



- 6                       3  
 4                       2

Which pattern block was used to make the shape.

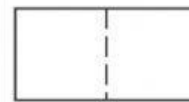


Mark the shape that matches the description.

halves                 

fourths                 

What shapes were used to make this rectangle?



- squares               triangles  
 rectangles           trapezoids

Describe the equal parts. Write *two halves*, *three thirds*, or *four fourths*.

     \_\_\_\_\_            \_\_\_\_\_  
      \_\_\_\_\_            \_\_\_\_\_

Draw lines to partition

     3 equal parts            A            B            C

Noura and Nabila are sharing a sandwich. They each have an equal part. How much of the sandwich does each girl have?

\_\_\_\_\_ sandwich

Draw lines to partition

     2 equal parts            A            B            C