



Strauss Preparatory School

Name: Dimeji Olugbodi

Class: Year 5


Date: _____

Subject: Math


Learning objective: I can find shapes with the same area but different perimeters.

1. Tick all the shapes with area of 12cm^2 . Write the perimeters of the correct shapes.


Perimeters of shapes with an area of 12cm^2 :




Perimeter: _____




Perimeter: _____




Perimeter: _____



Perimeter: _____



Perimeter: _____



Perimeter: _____

2. Record the shapes in this table, ordering them so that you are sure that you have found all the squares and rectangles with an area of 12cm^2 :

Side 1	Side 2	Perimeter

3. Find and record all the squares or rectangles you can find with an area of 20cm^2 .

Side 1	Side 2	Perimeter