





Watch the video

Draw a line from the clock to the correct time.




two o'clock



seven - fifteen



nine - thirty



six - forty - five

Listen and draw a line to the time you hear



8:02



8:08



8:04



8:01



8:06



8:09



8:03

