





















Use the graph to answer the questions.



Favorite Fruits									
 Apple									
 Orange									
 Pear									



1. Do more students like  or  ? \_\_\_\_\_



2. Which fruit has 7 votes? \_\_\_\_\_

3. Which fruit has 6 votes? \_\_\_\_\_

4. How many students voted for  ? \_\_\_\_\_

5. There are how many more votes for  than for  ? \_\_\_\_\_

6. There are how many more votes for  than for  ? \_\_\_\_\_

7. There are how many more votes for  than for  ? \_\_\_\_\_