

# Assessment C

1. Write the numbers.

a) five hundred and sixty-one

b) three hundred and forty

c) nine hundred and eight

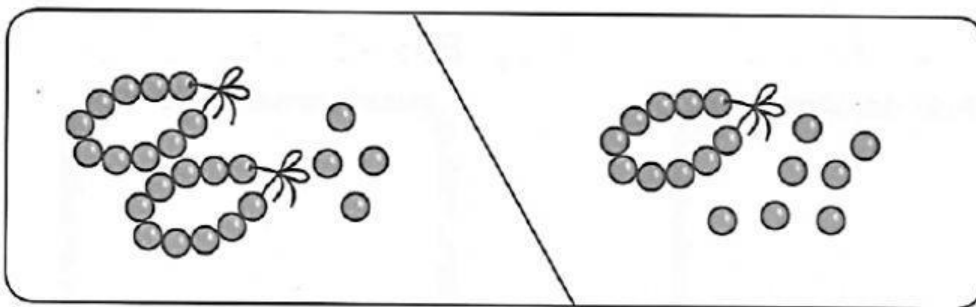
2. Write the numbers in words.

a) 723

b) 1000

c) 909

3. Write two addition sentences and two subtraction sentences for the pictures below.



$$\square + \square = \square$$

$$\square - \square = \square$$

$$\square + \square = \square$$

$$\square - \square = \square$$

4. Fill in the circles with  $>$  or  $<$ .

a)  $601 \bigcirc 599$

b)  $689 \bigcirc 710$

c)  $740 \bigcirc 700$

d)  $560 \bigcirc 506$

e)  $380 \bigcirc 388$

f)  $714 \bigcirc 711$

5. a) What number is 1 more than 99? \_\_\_\_\_

b) What number is 10 more than 590? \_\_\_\_\_

c) What number is 10 less than 475? \_\_\_\_\_

d) What number is 100 more than 780? \_\_\_\_\_

e) What number is 100 less than 624? \_\_\_\_\_

6. Write the missing numbers.

a) 

750	740		720		700	
-----	-----	--	-----	--	-----	--

b) 

392		592		792		992
-----	--	-----	--	-----	--	-----

7. Add or subtract.

a)  $263 + 126 =$  \_\_\_\_\_

b)  $805 - 305 =$  \_\_\_\_\_



c)  $330 + 86 = \underline{\hspace{2cm}}$



d)  $450 - 48 = \underline{\hspace{2cm}}$



e)  $469 + 531 = \underline{\hspace{2cm}}$



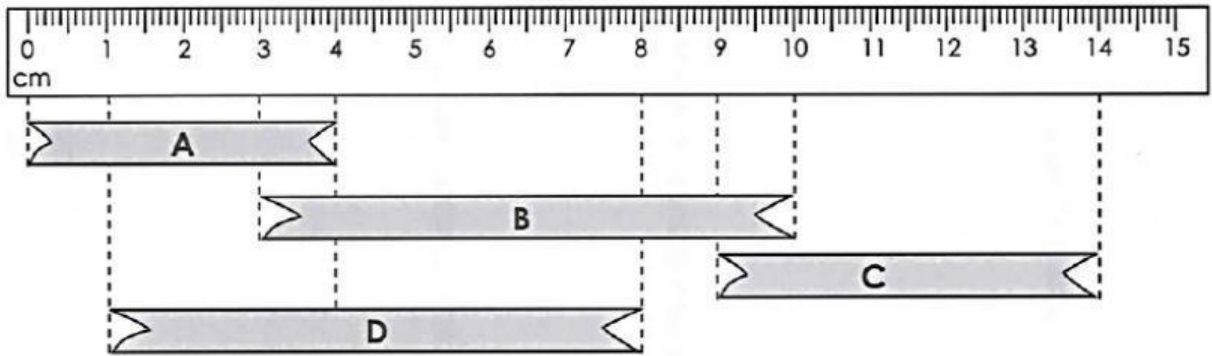
f)  $622 - 554 = \underline{\hspace{2cm}}$



8. Write the greatest number and the smallest number using all the 3 digits.

		greatest number	smallest number
a)	4, 0, 2		
b)	3, 4, 1		
c)	5, 4, 7		
d)	4, 2, 3		
e)	5, 4, 9		

9. Fill in the blanks.



- Ribbon \_\_\_\_\_ is the shortest.
- Ribbon B is \_\_\_\_\_ cm longer than Ribbon C.
- Ribbons \_\_\_\_\_ and \_\_\_\_\_ have the same length.

10. Fill in the blanks.



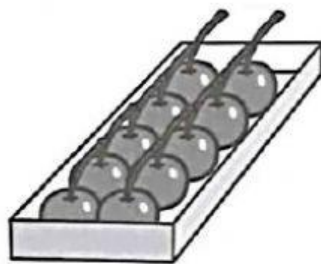
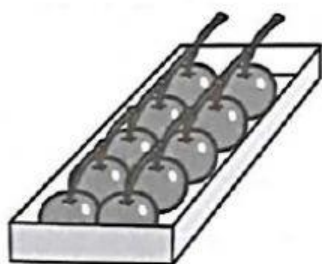
- The mass of the boy is \_\_\_\_\_ kilograms.
- The mass of the girl is \_\_\_\_\_ kilograms.
- The mass of the baby is \_\_\_\_\_ kilograms.

11. Fill in the blanks with **kilograms**, **grams**, **meters** or **centimeters**.

- Mr. Gopal's mass is about 60 \_\_\_\_\_.
- Jai's height is about 160 \_\_\_\_\_.
- After dinner, Lily and her brother ate about 100 \_\_\_\_\_ of grapes.
- The height of a door is about 2 \_\_\_\_\_.



12. Write two multiplication sentences and two division sentences.




$$\square \times \square = \square$$

$$\square \times \square = \square$$

$$\square \div \square = \square$$

$$\square \div \square = \square$$

13. Put 12 chickens into 2 equal groups.



There are \_\_\_\_\_ chickens in each group.

14. Put 27 strawberries into groups of 3.



There are \_\_\_\_\_ groups of 3 strawberries.

15. Multiply or divide.

a)  $3 \times 2 =$  \_\_\_\_\_

b)  $5 \times 3 =$  \_\_\_\_\_

c)  $7 \times 10 =$  \_\_\_\_\_

d)  $9 \times 2 =$  \_\_\_\_\_

e)  $5 \times 5 =$  \_\_\_\_\_

f)  $5 \times 10 =$  \_\_\_\_\_

g)  $2 \times 8 =$  \_\_\_\_\_

h)  $8 \times 5 =$  \_\_\_\_\_

i)  $2 \div 2 =$  \_\_\_\_\_

j)  $6 \div 2 =$  \_\_\_\_\_

k)  $10 \div 2 =$  \_\_\_\_\_

l)  $18 \div 2 =$  \_\_\_\_\_

m)  $10 \div 5 =$  \_\_\_\_\_

n)  $15 \div 5 =$  \_\_\_\_\_

o)  $20 \div 10 =$  \_\_\_\_\_

p)  $100 \div 10 =$  \_\_\_\_\_

Solve the word problems.  
Draw bar models to help you.  
Show your work clearly.

16. Dorra bought 124 balloons.  
48 of them were red balloons.  
The rest were blue balloons.  
How many blue balloons were there?

There were \_\_\_\_\_ blue balloons.

17. The total mass of two apples is 290 grams.  
The mass of one apple is 132 grams.  
What is the mass of the other apple?

The mass of the other apple is \_\_\_\_\_ grams.

18. Kayla is 98 centimeters tall.  
She is 14 centimeters shorter than Gina.  
What is Gina's height?

Gina's height is \_\_\_\_\_ centimeters.

19. Leela bought 20 plums.  
She put 5 plums in a plastic bag.  
How many plastic bags did she use?



She used \_\_\_\_\_ plastic bags.

20. There are 4 fish in each bowl.  
There are 10 bowls of fish.  
How many fish are there altogether?



There are \_\_\_\_\_ fish altogether.

21. Maylene tied 18 turnips into 2 bundles.  
How many turnips were there in each bundle?

There were \_\_\_\_\_ turnips in each bundle.

**Press finish!!**

