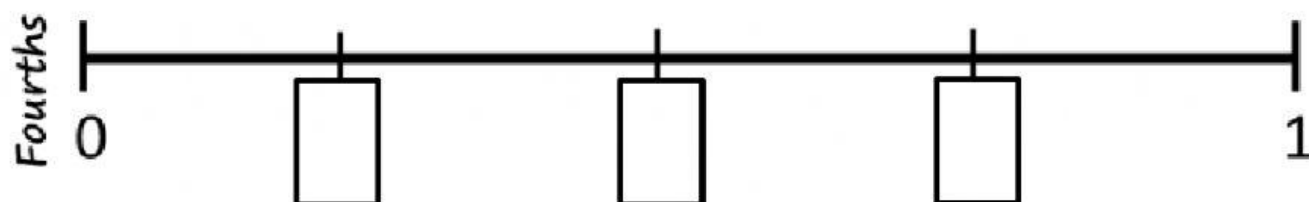
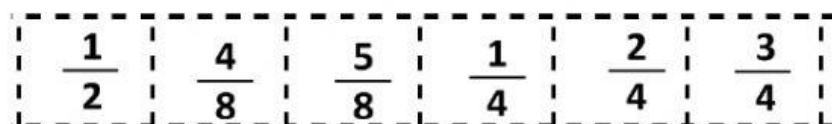



1. Drag / write the correct fraction on the number line



2. Choose the correct fraction for the shape.



$\frac{4}{5}$

$\frac{1}{3}$

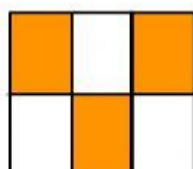
$\frac{3}{4}$



$\frac{5}{6}$

$\frac{3}{7}$

$\frac{1}{8}$



$\frac{2}{7}$

$\frac{4}{8}$

$\frac{3}{6}$

3 Calculate the following using the breaking up method

$145 + 254 =$						$455 - 144 =$					
		H		T				H		T	
	=		+		+			=		+	
	=		+		+			=		+	
	=		+		+			=		+	