

[https://www.youtube.com/watch?v=n0FZhQ\\_GkKw](https://www.youtube.com/watch?v=n0FZhQ_GkKw)



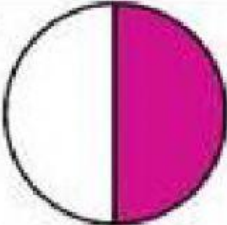
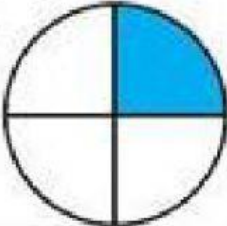

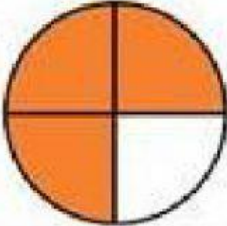

 Click Here to Watch Now!

<https://www.youtube.com/watch?v=yT1WuyxTCmo>



 Click Here to Watch Now!

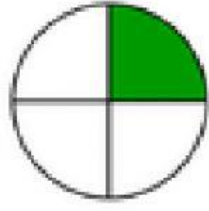
I. Select the correct answer for each of the following fractions

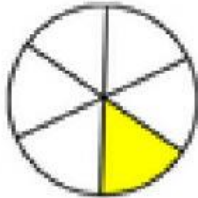
1.		<input type="radio"/> $\frac{2}{3}$	<input type="radio"/> $\frac{2}{4}$	<input type="radio"/> $\frac{1}{4}$	<input type="radio"/> $\frac{1}{2}$
2.		<input type="radio"/> $\frac{1}{2}$	<input type="radio"/> $\frac{3}{4}$	<input type="radio"/> $\frac{1}{4}$	<input type="radio"/> $\frac{1}{3}$
3.		<input type="radio"/> $\frac{3}{4}$	<input type="radio"/> $\frac{1}{2}$	<input type="radio"/> $\frac{2}{3}$	<input type="radio"/> $\frac{1}{3}$
4.		<input type="radio"/> $\frac{2}{4}$	<input type="radio"/> $\frac{3}{4}$	<input type="radio"/> $\frac{1}{3}$	<input type="radio"/> $\frac{1}{4}$
5.		<input type="radio"/> $\frac{2}{3}$	<input type="radio"/> $\frac{1}{3}$	<input type="radio"/> $\frac{2}{4}$	<input type="radio"/> $\frac{3}{4}$

2. Complete by filling in the fraction of the following shapes.

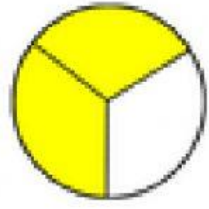


1







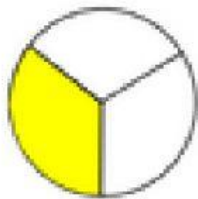
6

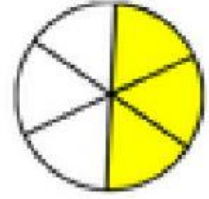










3. Select the correct fraction that shows how many pizza slices are gone


 $\frac{1}{3}$ 
 $\frac{1}{4}$ 
 $\frac{1}{5}$ 

 $\frac{1}{3}$ 
 $\frac{1}{4}$ 
 $\frac{1}{5}$ 

 $\frac{2}{5}$ 
 $\frac{2}{6}$ 
 $\frac{2}{8}$ 
