

# MATEMÁTICA

NÚMEROS HASTA EL 20.

1 Completa las secuencias.

→  —  —  —

—  —  —

→  —  —  —

—  —  —

→  —  —  —

—  —  —

2 Cuenta y marca en la cinta numerada.



Hay


1	2	3	4	5	6	7	8	9	10	11	12	13	14	15	16	17	18	19	20
---	---	---	---	---	---	---	---	---	----	----	----	----	----	----	----	----	----	----	----



Hay

1	2	3	4	5	6	7	8	9	10	11	12	13	14	15	16	17	18	19	20
---	---	---	---	---	---	---	---	---	----	----	----	----	----	----	----	----	----	----	----

3 Cuenta y une:



19

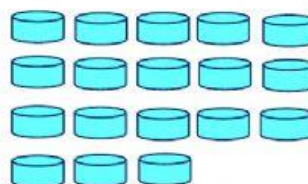
16

12

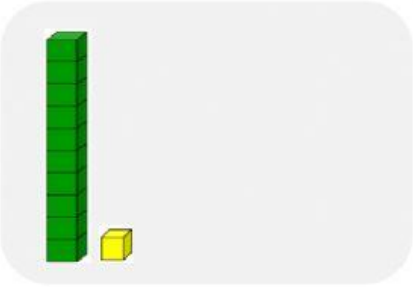
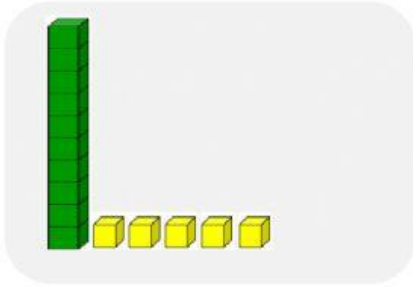
18

14

20



4 Cuenta y une:



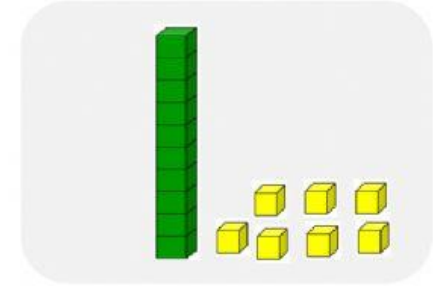

diecisiete

once

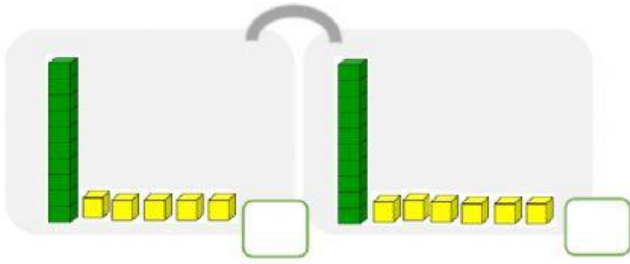
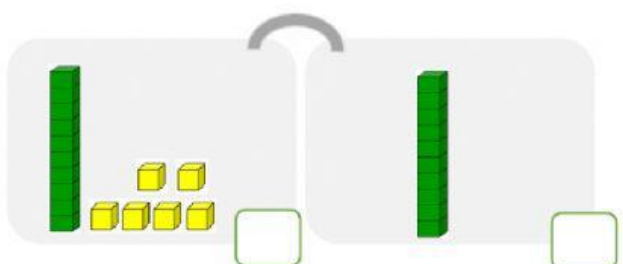
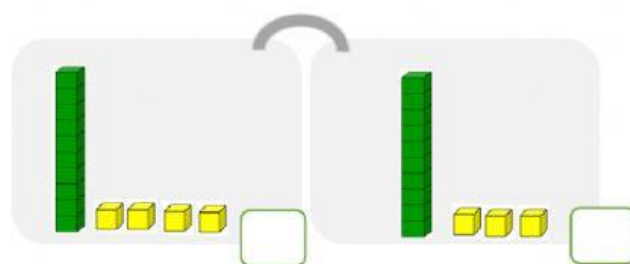
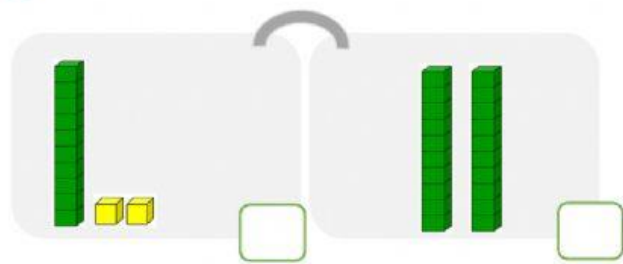
dieciséis

quince

diez



5 Marca donde hay **más**:



5 Marca donde hay **menos**:

