

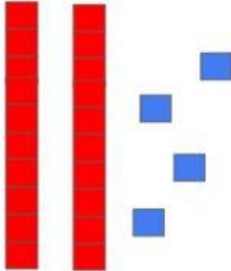
Decenas y unidades II



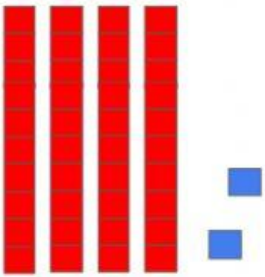
Cuenta y completa.



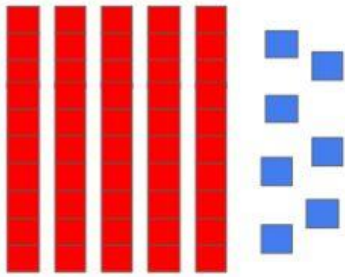
2 decenas y 1 unidad

$$\boxed{20} + \boxed{1} = \boxed{21}$$


 decenas y unidades

$$\boxed{} + \boxed{} = \boxed{}$$


 decenas y unidades

$$\boxed{} + \boxed{} = \boxed{}$$


 decenas y unidades

$$\boxed{} + \boxed{} = \boxed{}$$