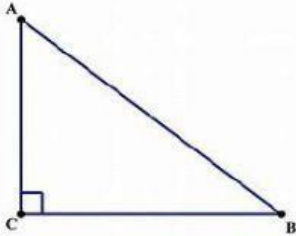


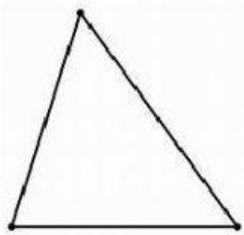
Name : 

Classify these triangles acute , right , obtuse

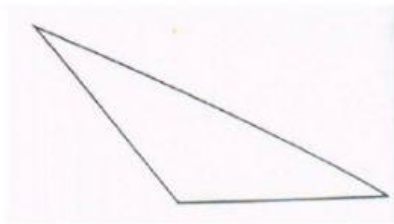
1)



2)



3)



4) A triangle that has 3 acute angles ...

5) A triangle that has one angle
greater than 90° ...