

# How many sides?


Count the sides on each shape and press the correct answer below.




5   3   4




3   2   1




1   4   3




2   1   6



1   5   3



3   2   6



1   4   8



3   4   1



2   3   8