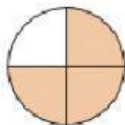


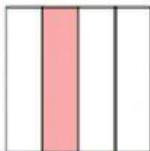
Determine which letter best describes the shaded portion.

1)



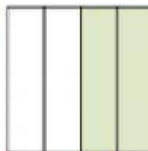
- A. one-fourth  
B. three quarters  
C. four quarters

2)




- A. two halves  
B. four quarters  
C. one-fourth

3)



- A. four-fourths  
B. two halves  
C. two quarters

4)



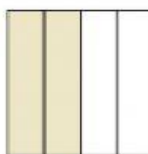
- A. one quarter  
B. one half  
C. three-fourths

5)




- A. two halves  
B. one quarter  
C. two quarters

6)



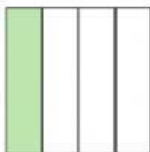
- A. two halves  
B. two quarters  
C. four quarters

7)



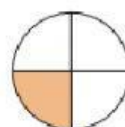
- A. one quarter  
B. one half  
C. four-fourths

8)



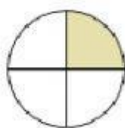
- A. two halves  
B. one quarter  
C. one half

9)



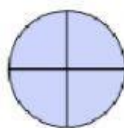
- A. two quarters  
B. two halves  
C. one quarter

10)



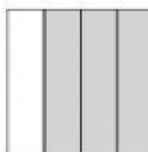
- A. two halves  
B. one-fourth  
C. three quarters

11)



- A. one half  
B. four quarters  
C. one quarter

12)



- A. two quarters  
B. two halves  
C. three quarters

## Answers

1. \_\_\_\_\_

2. \_\_\_\_\_

3. \_\_\_\_\_

4. \_\_\_\_\_

5. \_\_\_\_\_

6. \_\_\_\_\_

7. \_\_\_\_\_

8. \_\_\_\_\_

9. \_\_\_\_\_

10. \_\_\_\_\_

11. \_\_\_\_\_

12. \_\_\_\_\_