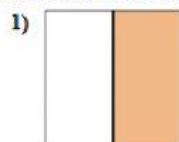
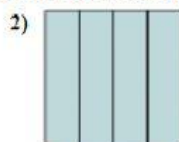


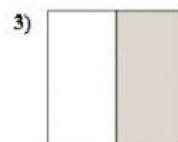
Determine which letter best describes the shaded portion.



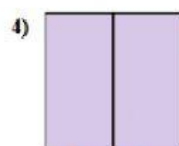
- A. four-fourths  
B. two halves  
C. one half



- A. four quarters  
B. one half  
C. one quarter



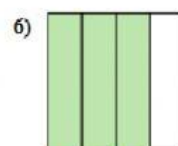
- A. two halves  
B. four-fourths  
C. one half



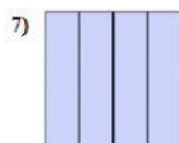
- A. two halves  
B. one half  
C. one-fourth



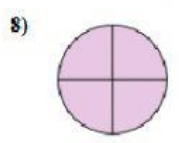
- A. one half  
B. two halves  
C. two-fourths



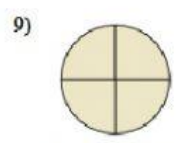
- A. two halves  
B. three quarters  
C. one half



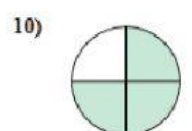
- A. four-fourths  
B. two-fourths  
C. one quarter



- A. one quarter  
B. three-fourths  
C. four-fourths



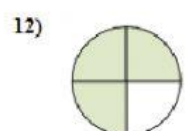
- A. four quarters  
B. two quarters  
C. three-fourths



- A. one half  
B. three quarters  
C. four-fourths



- A. two-fourths  
B. three quarters  
C. four quarters



- A. three-fourths  
B. one-fourth  
C. four-fourths

Answers

1. \_\_\_\_\_

2. \_\_\_\_\_

3. \_\_\_\_\_

4. \_\_\_\_\_

5. \_\_\_\_\_

6. \_\_\_\_\_

7. \_\_\_\_\_

8. \_\_\_\_\_

9. \_\_\_\_\_

10. \_\_\_\_\_

11. \_\_\_\_\_

12. \_\_\_\_\_