

# NÚMEROS DECIMALES 1

1. Expresa cada fracción en decimales.

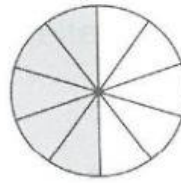
a)



2 décimas

$$\frac{2}{10} = \boxed{\phantom{00}}$$

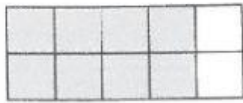
b)



5 décimas

$$\frac{5}{10} = \boxed{\phantom{00}}$$

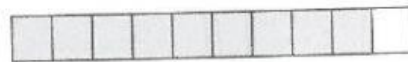
c)



8 décimas

$$\frac{8}{10} = \boxed{\phantom{00}}$$

d)

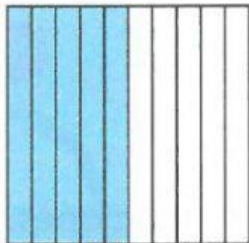


9 décimas

$$\frac{9}{10} = \boxed{\phantom{00}}$$

2. Expresa cada fracción en decimales.

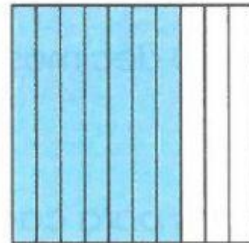
a)



5 décimos

$$\frac{5}{10} = \boxed{\phantom{00}}$$

b)



7 décimos

$$\frac{7}{10} = \boxed{\phantom{00}}$$

3. Escribe decimales para cada una de las siguientes situaciones.

a)




4 décimas =  $\boxed{\phantom{00}}$

b)



6 décimas =  $\boxed{\phantom{00}}$

c)



7 décimas =  $\boxed{\phantom{00}}$

d)



9 décimas =  $\boxed{\phantom{00}}$