



UNE CADA EQUIVALENCIA CON SU REGLETA CORRESPONDIENTE

Y ESCRIBE SU EXPRESIÓN NUMÉRICA




3



6



4



5



3



6



4



5