

May 28 Exit Slip (Test Review)


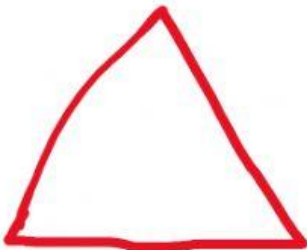

1. Which of the following shapes are polygons. Choose all the correct answers



2. Choose the drop down menu to fill in the blanks with correct answers.

- a. A shape with 3 sides and 3 angles is called a _____.
- b. All shapes with 4 sides and 4 angles are called _____.
- c. All shapes with 6 sides and 6 angles are called _____.
- d. All shapes with 8 sides and 8 angles are called _____.

3. Identify and join the pair of parallel sides.



.

Two pair of parallel sides

No parallel sides

One pair of parallel sides

Select as many special names as possible for each quadrilateral.



Rectangle

Square

Rhombus

Parallelogram

Trapezoid



Rectangle

Square

Rhombus

Parallelogram

Trapezoid



Rectangle

Square

Rhombus

Parallelogram

Trapezoid



Rectangle

Square


Rhombus

Parallelogram


Trapezoid

4. How are the following groups alike and different?

Group A



Group B



Alike (same)	Different