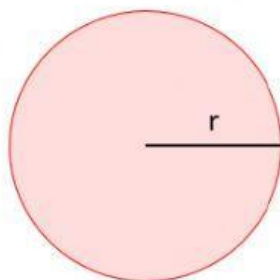


Name: \_\_\_\_\_

Date: \_\_\_\_\_

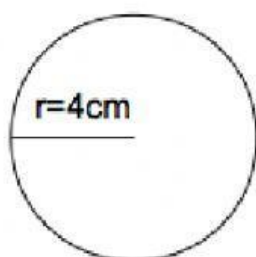
Mathematics  
Area of a Circle



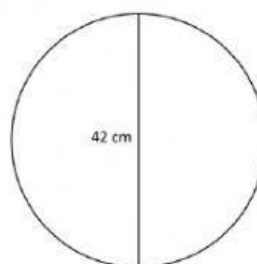
Area of circle

$$A = \pi r^2$$

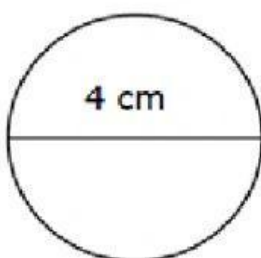
Use the formula to find the area of each circle.



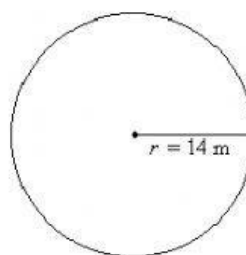
Ans: \_\_\_\_\_



Ans: \_\_\_\_\_



Ans: \_\_\_\_\_



Ans: \_\_\_\_\_

The radius of circle is 2.5 cm long. What is the area of the circle?

Ans: \_\_\_\_\_

The diameter of circle is 10 ft long. What is the area of the circle?

Ans: \_\_\_\_\_

Created by: Ms. A. Bain