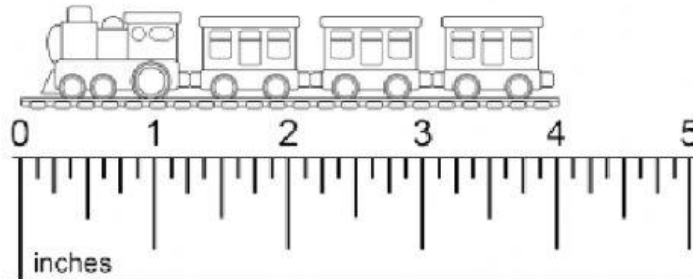


Name: _____ Date: _____

Length

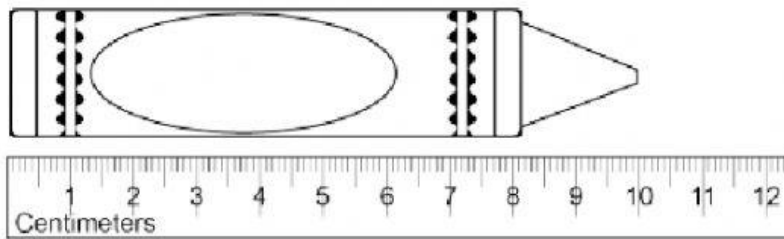
1. Use the ruler to answer the question.



- A: Inches
B: Centimeters
C: Feet

How long is the train? _____

2. Use the ruler to answer the question.



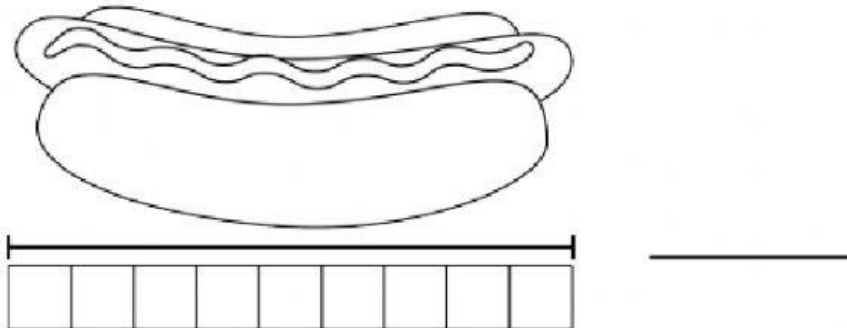
- A: Inches
B: Centimeters
C: Feet

How long is the crayon? _____

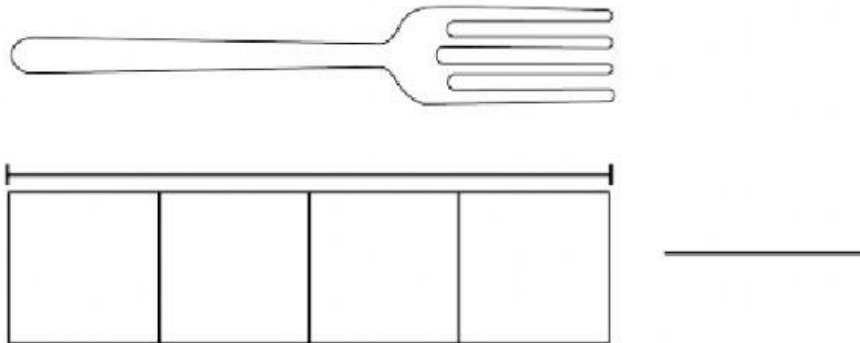
3. Julia bought a jump rope for her friend and measured half of it. Her measurement for half of the jump rope was about 50 inches. About how long is the whole jump rope?

- A: 50 inches
B: 100 inches
C: 150 inches

4. Each ☐ is about 1 cm long. How long is the hot dog?



5. Each color tile is about 1 inch long. How many inches long is the fork?



6. Bob wants to measure the length of his foot. He has inch tiles and centimeter cubes. He wants to use the fewest measuring tools possible. Should he use inch tiles or centimeter cubes? Explain your answer.

- A: Inches
B: Centimeters