

# Mathematics

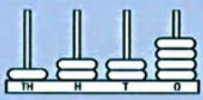
## Grade 4

### THURSDAY

1. The time is *ten to* .



2. What is the difference between 13 and 9?

3.  The number on the abacus shows 1224. Rewrite the number after adding one extra hundred bead.


4. This is a .



5.  $68 - 8 = 60$ ,  $58 - 8 = 50$ ,  $48 - 8 =$

6.  $26 + 4 = 30$ ,  $36 + 4 = 40$ ,  $46 + 4 =$


7. Write the shaded area as a fraction.



8. Write 100 less than 3468.

9. Draw a  $3\frac{1}{2}$  cm-long line.



10. Round 245 to the nearest 100.



To balance a house brick, (approximately 3 kg) which set of weights is the best to use?

How many weights are needed?

12.  $9^2 =$    $\times$    $=$

13.   Which shape will tessellate?

A B

14. 1 kg =  g

15. One decade =  years

16.  $5000 + 10\,000 + 30 + 900 + 4 =$

17.  $R5.00 - R1.50 =$

18. 

A	B	C	D

 Does this shape match A, B, C or D?



19.  $21 \div 7 = 3$ ,  $28 \div 7 = 4$ ,  $35 \div 7 =$

20. Write *six-tenths* as a decimal.



MY SCORE